

Recitation Worksheet Eleven

Name:

MyID:

Textbook:

Chemistry & Chemical Reactivity

by John C. Kotz, Paul M. Treichel, John R. Townsend, David Treichel

11th Edition | Copyright 2024

Instructions:

- This recitation worksheet covers Ch. 16.4, 16.8-16.9
- Please enter your first and last name as it appears on the eLC roster (do not use a nickname that is not reflected in eLC).
- Your UGA myID is a combination of letters and numbers (example: Dr. Abdelrahman's MyID is ema88805@uga.edu). **Do not use your 81x number.**
- Your completed worksheet has to be submitted to **Gradescope**. You have multiple options for submission:
 - You may use an app to annotate the worksheet by placing your answers in the answer boxes and showing your work when appropriate. Afterward, submit the worksheet to Gradescope. You will not need to upload anything to eLC.
 - You may print out the worksheet, write your answers in the answer boxes, and show your work on it when appropriate. Afterward, convert the worksheet to a PDF and submit to Gradescope. You will not need to upload anything to eLC.
 - If you do not have access to a printer, you may type your answers directly into the worksheet PDF and then submit it to Gradescope. Write your work on separate sheets of paper, convert them to a PDF, and upload to the appropriate dropbox on eLC.
 - There is a Gradescope app available for both iOS and Android devices that allows you to scan and submit your printed work, or you can submit your fillable PDF directly.
- The following criteria **must** be met to be eligible for full credit:
 - You must make sure the pages are in the correct order and have the same layout as the original worksheet when submitting to Gradescope regardless of your submission type.
 - Answers must be written in the corresponding answer boxes.
 - You must show your work when appropriate.
- This worksheet is due no later than **12:00 PM (noon) on the Saturday, November 9th**.
- A periodic table and formula sheet are attached to the end of this worksheet. Please keep these attached to your worksheet in the correct order when submitting to Gradescope.

1. Which of the pairs below has the **stronger acid** listed **first**? Select all that apply. Insert letters without spaces in the answer box, example **ABCD**.

- A. HClO_2 and HClO_3
- B. H_3PO_4 and H_2SiO_3
- C. $\text{I}_3\text{CCH}_2\text{CH}_2\text{COOH}$ and $\text{CH}_3\text{CH}_2\text{CCl}_2\text{COOH}$
- D. H_2PO_4^- and HPO_4^{2-}
- E. CF_3COOH and CH_3COOH

2. Which of the choices represents the correct order of the acids below in order of **strongest to weakest**?

HBr, CHCl_2COOH , $\text{CH}_3\text{CH}_2\text{COOH}$, $\text{CH}_3\text{F}_2\text{CCOOH}$, $\text{I}_2\text{CHCH}_2\text{COOH}$

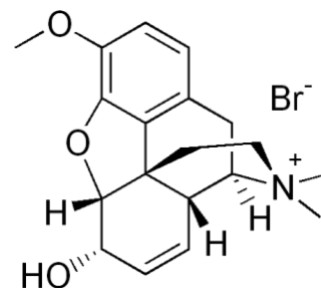
☐

- A. $\text{HBr} > \text{CHCl}_2\text{COOH} > \text{CH}_3\text{F}_2\text{CCOOH} > \text{I}_2\text{CHCH}_2\text{COOH} > \text{CH}_3\text{CH}_2\text{COOH}$
- B. $\text{CH}_3\text{CH}_2\text{COOH} > \text{I}_2\text{CHCH}_2\text{COOH} > \text{CH}_3\text{F}_2\text{CCOOH} > \text{CHCl}_2\text{COOH} > \text{HBr}$
- C. $\text{HBr} > \text{CH}_3\text{F}_2\text{CCOOH} > \text{CHCl}_2\text{COOH} > \text{I}_2\text{CHCH}_2\text{COOH} > \text{CH}_3\text{CH}_2\text{COOH}$
- D. $\text{HBr} > \text{I}_2\text{CHCH}_2\text{COOH} > \text{CH}_3\text{F}_2\text{CCOOH} > \text{CHCl}_2\text{COOH} > \text{CH}_3\text{CH}_2\text{COOH}$
- E. $\text{CHCl}_2\text{COOH} > \text{CH}_3\text{F}_2\text{CCOOH} > \text{I}_2\text{CHCH}_2\text{COOH} > \text{CH}_3\text{CH}_2\text{COOH} > \text{HBr}$

3. You were asked to prepare an aqueous solution of pH ~ 8.5 and you are provided with a list of salts below. Which of these salts would you use? ($K_{a1} \text{H}_3\text{PO}_4 = 7.08 \times 10^{-3}$, $K_{a2} \text{H}_2\text{PO}_4^- = 6.31 \times 10^{-8}$, $K_{a3} \text{HPO}_4^{2-} = 4.47 \times 10^{-13}$)

- A. KNO_2
- B. NH_4Cl
- C. NaNO_3
- D. KH_2PO_4
- E. $\text{CH}_3\text{NH}_3\text{Cl}$
- F. FeCl_3

4. The salt of codeine, codeine bromide ($\text{C}_{18}\text{H}_{21}\text{O}_3\text{NH}^+\text{Br}^-$) has analgesic and antitussive properties. Calculate the pH of a 0.324 M codeine bromide solution. pK_b of $\text{C}_{18}\text{H}_{21}\text{O}_3\text{N}$ is 7.95.



5. Which of the following ionic compounds when dissolved in water produce a solution with the **highest** pH?

- A. CaBr_2
- B. NH_4I
- C. $\text{N}_2\text{H}_5\text{Cl}$
- D. $\text{Sr}(\text{NO}_3)_2$
- E. $\text{C}_6\text{H}_5\text{CH}_2\text{COONa}$

6. Use the picture below to answer the following questions

- A. Of the elements indicated on the periodic table shown above, which forms the strongest binary acid, H_2X or HX , where $\text{X} = \text{A, B, C, or D}$?

- B. Of the elements indicated on the periodic table shown above, which forms the weakest binary acid, H_2X or HX , where $\text{X} = \text{A, B, C, or D}$?

Box 1

- C. Of the elements indicated on the periodic table shown above, which forms the strongest oxoacid acid with the formula H_2XO_3 or HXO_3 , where X = A, B, C, or D?

- D. Of the elements indicated on the periodic table shown above, which forms the weakest oxoacid acid with the formula H_2XO_3 or HXO_3 , where X = A, B, C, or D?

7. Which of the following will be the strongest acid?

- A. $\text{CH}_3\text{CH}_2\text{OH}$
- B. $\text{CH}_3\text{CH}_2\text{NH}_2$
- C. $\text{CH}_3\text{CH}_2\text{SH}$
- D. $\text{CH}_3\text{CH}_2\text{CH}_3$
- E. All the above acids have the same strength

8. You are given the two sets of acids and each set consists of two acids:

Set I: a) H_2Se and b) H_2Te **Set II:** a) H_3PO_4 and b) H_3AsO_4 ,

Use the two sets of acids to answer the question below:

Which of the acids is the **weaker acid** in each set?

Set I

Set II

9. Calculate the pH of a sulfuric acid (H_2SO_4 , $K_a \text{HSO}_4^- = 1.2 \times 10^{-2}$) solution that has a concentration of:

A. 5.00 M

B. 0.075 M

10. What is the $[\text{H}_3\text{O}^+]$, $[\text{SO}_3^{2-}]$, and pH of 0.054 M H_2SO_3 ? ($K_{\text{a}1} = 1.54 \times 10^{-2}$, $K_{\text{a}2} = 1.02 \times 10^{-7}$)

A. $[\text{H}_3\text{O}^+]$

M

B. $[\text{SO}_3^{2-}]$

M

C. pH

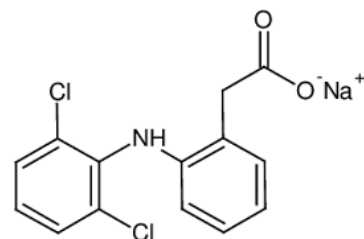
11. Using the table below for the relative acid strength, arrange the following species in order of **decreasing** relative **base strength**: ClO_2^- , Br^- , H_2O , OCl^- , $\text{C}_6\text{H}_5\text{O}^-$

| Formula | Name | Value of K_a^* |
|--|----------------------------|-----------------------|
| HSO_4^- | Hydrogen sulfate ion | 1.2×10^{-2} |
| HClO_2 | Chlorous acid | 1.2×10^{-2} |
| $\text{HC}_2\text{H}_2\text{ClO}_2$ | Monochloroacetic acid | 1.35×10^{-3} |
| HF | Hydrofluoric acid | 7.2×10^{-4} |
| HNO_2 | Nitrous acid | 4.0×10^{-4} |
| $\text{HC}_2\text{H}_3\text{O}_2$ | Acetic acid | 1.8×10^{-5} |
| $[\text{Al}(\text{H}_2\text{O})_6]^{3+}$ | Hydrated aluminum(III) ion | 1.4×10^{-5} |
| HOCl | Hypochlorous acid | 3.5×10^{-8} |
| HCN | Hydrocyanic acid | 6.2×10^{-10} |
| NH_4^+ | Ammonium ion | 5.6×10^{-10} |
| HOC_6H_5 | Phenol | 1.6×10^{-10} |

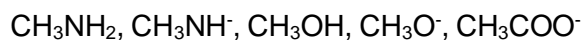
↑
Increasing acid strength

- A. $\text{C}_6\text{H}_5\text{O}^- > \text{OCl}^- > \text{ClO}_2^- > \text{H}_2\text{O} > \text{Br}^-$
 B. $\text{Br}^- > \text{H}_2\text{O} > \text{ClO}_2^- > \text{OCl}^- > \text{C}_6\text{H}_5\text{O}^-$
 C. $\text{ClO}_2^- > \text{OCl}^- > \text{Br}^- > \text{H}_2\text{O} > \text{C}_6\text{H}_5\text{O}^-$
 D. $\text{OCl}^- > \text{Br}^- > \text{ClO}_2^- > \text{C}_6\text{H}_5\text{O}^- > \text{H}_2\text{O}$
 E. $\text{H}_2\text{O} > \text{OCl}^- > \text{Br}^- > \text{C}_6\text{H}_5\text{O}^- > \text{ClO}_2^-$

12. Diclofenac sodium is the active ingredient in Voltaren®, is a non-steroidal anti-inflammatory drug used in a gel form for arthritis pain relief. Calculate the pH of 0.435 M diclofenac sodium ($\text{C}_{14}\text{H}_{11}\text{Cl}_2\text{NO}_2\text{Na}^+$) solution. $\text{p}K_a$ of $\text{C}_{14}\text{H}_{11}\text{Cl}_2\text{NO}_2\text{H}$ is 4.15.

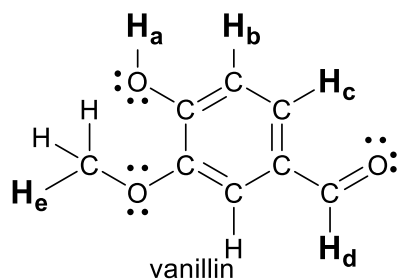


13. Rank the following species from **strongest to weakest base**. Select an answer choice from A-E.



- A. $\text{CH}_3\text{NH}^- > \text{CH}_3\text{O}^- > \text{CH}_3\text{COO}^- > \text{CH}_3\text{NH}_2 > \text{CH}_3\text{OH}$
B. $\text{CH}_3\text{OH} > \text{CH}_3\text{COO}^- > \text{CH}_3\text{NH}_2 > \text{CH}_3\text{O}^- > \text{CH}_3\text{NH}^-$
C. $\text{CH}_3\text{NH}^- > \text{CH}_3\text{O}^- > \text{CH}_3\text{NH}_2 > \text{CH}_3\text{COO}^- > \text{CH}_3\text{OH}$
D. $\text{CH}_3\text{O}^- > \text{CH}_3\text{NH}^- > \text{CH}_3\text{COO}^- > \text{CH}_3\text{NH}_2 > \text{CH}_3\text{OH}$
E. $\text{CH}_3\text{NH}_2 > \text{CH}_3\text{NH}^- > \text{CH}_3\text{O}^- > \text{CH}_3\text{OH} > \text{CH}_3\text{COO}^-$

14. The primary chemical responsible for the flavor associated with vanilla is vanillin.



Which of the labeled hydrogens would be the most likely to generate H^+ in solution?

- A. H_a
B. H_b
C. H_c
D. H_d
E. H_e

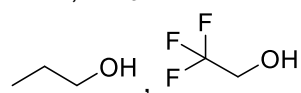
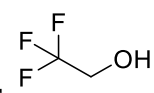
15. Which pair of acids lists the **stronger** acid first? Select all that apply.

☐

A. H_2CO_3 , HCO_3^-

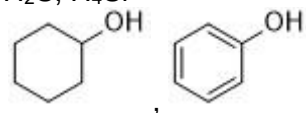
B. HOCl , HClO_2

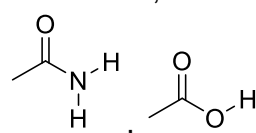
C. NH_4^+ , NH_3

D. , 

E. HBr , HI

F. H_2S , H_4Si

G. 

H. 

16. Which statement most accurately explains what would be observed about the acidic nature of these compounds?

☐


- A. A solution of H_2S would be more acidic because $\begin{array}{c} \text{H} \\ | \\ \text{H}-\text{S}^+-\text{H} \\ | \\ \text{H} \end{array}$ is more stable than $\begin{array}{c} \text{H} \\ | \\ \text{H}-\text{P}^+-\text{H} \\ | \\ \text{H} \end{array}$
- B. A solution of PH_3 would be more acidic because $\begin{array}{c} \text{H} \\ | \\ \text{H}-\text{S}^+-\text{H} \\ | \\ \text{H} \end{array}$ is more stable than $\begin{array}{c} \text{H} \\ | \\ \text{H}-\text{P}^+-\text{H} \\ | \\ \text{H} \end{array}$
- C. A solution of H_2S would be more acidic because $\text{H}-\text{S}^-$ is more stable than $\begin{array}{c} \ominus \\ | \\ \text{H}-\text{P}-\text{H} \\ | \\ \text{H} \end{array}$
- D. A solution of PH_3 would be more acidic because $\text{H}-\text{S}^-$ is more stable than $\begin{array}{c} \ominus \\ | \\ \text{H}-\text{P}-\text{H} \\ | \\ \text{H} \end{array}$
- E. A solution of H_2S would be more acidic because $\begin{array}{c} \ominus \\ | \\ \text{H}-\text{P}-\text{H} \\ | \\ \text{H} \end{array}$ is more stable than $\text{H}-\text{S}^-$
- F. A solution of PH_3 would be more acidic because $\begin{array}{c} \ominus \\ | \\ \text{H}-\text{P}-\text{H} \\ | \\ \text{H} \end{array}$ is more stable than $\text{H}-\text{S}^-$

17. For each of these, define the resulting aqueous solutions as either acidic (A), basic (B) or neutral (N).

A. $\text{CH}_3\text{CO}_2\text{Na}$

B. LiNO_2

C. potassium sulfite

D. ammonium bromide

E. potassium chloride

18. What will be the pH of an aqueous solution made up of 0.514 g potassium cyanide KCN in 125 mL water. K_a

$\text{HCN} = 6.2 \times 10^{-10}$.

19. Each of these pairs contains one strong acid and one weak acid EXCEPT:

- A. H_2SO_4 and H_2CO_3
- B. HNO_3 and HClO_2
- C. HBr and H_3PO_3
- D. $\text{H}_2\text{PO}_3^{2-}$ and HCN
- E. HCl and H_2Se

20. Which of the choices represent the substances below arranged in the correct order of increasing pH? All solutions have the same concentration of 0.10 M.

HI , NaNO_2 , NaOH , NH_4ClO_4 , LiNO_3

- A. $\text{NaOH} < \text{NaNO}_2 < \text{NH}_4\text{ClO}_4 < \text{HI} < \text{LiNO}_3$
- B. $\text{HI} < \text{NH}_4\text{ClO}_4 < \text{LiNO}_3 < \text{NaNO}_2 < \text{NaOH}$
- C. $\text{NH}_4\text{ClO}_4 < \text{HI} < \text{NaNO}_2 < \text{LiNO}_3 < \text{NaOH}$
- D. $\text{NaNO}_2 < \text{NH}_4\text{ClO}_4 < \text{LiNO}_3 < \text{NaOH} < \text{HI}$
- E. $\text{LiNO}_3 < \text{NH}_4\text{ClO}_4 < \text{NaOH} < \text{HI} < \text{NaNO}_2$

21. Which of these would you predict to be the strongest acid?

- A. $\text{FCH}_2\text{CO}_2\text{H}$
- B. $\text{ClCH}_2\text{CO}_2\text{H}$
- C. $\text{BrCH}_2\text{CO}_2\text{H}$
- D. $\text{ICH}_2\text{CO}_2\text{H}$
- E. $\text{CH}_3\text{CO}_2\text{H}$

Extra Practice Questions: these questions will not be graded

1. When ammonium perchlorate, NH_4ClO_4 , is dissolved in water, will it give an acidic, basic, or neutral solution?

- A. Acidic
- B. Basic
- C. Neutral

2. Which of these would you predict to be the **strongest base**?

- A. Cl^-
- B. ClO^-
- C. ClO_2^-
- D. ClO_3^-
- E. ClO_4^-

3. Which of the salts is(are) considered **basic** when dissolved in water?

- I. NaNO_3
- II. K_3PO_4
- III. NH_4Cl

- A. I only
- B. II only
- C. I and II
- D. I and III
- E. II and III

4. Farmers who raise cotton once used arsenic acid, H_3AsO_4 , as a defoliant at harvest time. Arsenic acid is a polyprotic acid with $K_{a1} = 2.5 \times 10^{-4}$, $K_{a2} = 5.6 \times 10^{-8}$, and $K_{a3} = 3 \times 10^{-13}$. What is the pH of a 0.500 M solution of arsenic acid?

- A. 0.85
- B. 1.95
- C. 3.90
- D. 4.51

5. Arrange these 0.10 M aqueous solutions in order of **increasing pH**:

NaOH, HBr, NaCH₃CO₂, KBr, NH₄Br

- A. HBr, KBr, NH₄Br, NaCH₃CO₂, NaOH
- B. NaOH, NaCH₃CO₂, NH₄Br, KBr, HBr
- C. NaOH, NaCH₃CO₂, KBr, NH₄Br, HBr
- D. HBr, NH₄Br, KBr, NaCH₃CO₂, NaOH

6. Determine the pH of a 0.22 M NaF solution at 25 °C. The K_a of HF is 3.5×10^{-5} .

7. When blue litmus paper is placed in a substance that is acidic, it will turn red. Which solution would cause blue litmus to turn red?

- A. a solution of 0.10 M NaBr
- B. a solution of 0.01 M NH₃
- C. a solution of 0.01 M NH₄ClO₄
- D. a solution of 0.005 M KF
- E. a solution of 0.10 M Ca(CH₃CO₂)₂

8. Calculate the pH of a 0.59 M solution of NH_4Cl . K_b for $\text{NH}_3 = 1.8 \times 10^{-5}$.

9. What is the pH of an aqueous solution of 0.184 M carbonic acid, H_2CO_3 ? ($K_{a1} = 4.2 \times 10^{-7}$, $K_{a2} = 4.8 \times 10^{-11}$)

- A. 2.69
- B. 2.80
- C. 2.97
- D. 3.50
- E. 3.56

10. Which solution has the highest pH?

- A. 0.10 M HBr(aq)
- B. 0.10 M HI(aq)
- C. 0.10 M HF(aq)
- D. 0.10 M HCl(aq)
- E. 0.10 M $\text{HClO}_4\text{(aq)}$

Formula Sheet

Length

1 kilometer = 0.62137 mile
1 inch = 2.54 centimeters (exactly)
1 Ångstrom = 1×10^{-10} meter

Energy

1 joule = $1 \text{ kg} \cdot \text{m}^2 / \text{s}^2$
1 calorie = 4.184 joules
1 Calorie = 1 kilocalorie = 1000 calories
1 L·atm = 101.325 joules

Pressure

1 pascal = $1 \text{ N} / \text{m}^2 = 1 \text{ kg} / \text{m} \cdot \text{s}^2$
1 atmosphere = 101.325 kilopascals = 760 mm Hg = 760 torr = 14.70 lb/in²
1 bar = 1×10^5 Pa (exactly)

Temperature

0 K = -273.15°C
K = °C + 273.15
°C = (5/9)(°F - 32)

Mass

1 kg = 2.205 lbs

Volume

1 mL = $1 \text{ cm}^3 = 1 \text{ cc}$

Constants

$c = 2.998 \times 10^8 \text{ m/sec}$
 $h = 6.626 \times 10^{-34} \text{ J} \cdot \text{sec}^{-1}$
 $R = 0.08206 \text{ L} \cdot \text{atm} / \text{mol} \cdot \text{K} = 8.314 \text{ J} / \text{mol} \cdot \text{K}$
Specific heat of water = 4.184 J/g·K
Mass of an electron: $9.109 \times 10^{-31} \text{ kg}$
Mass of a proton: $1.673 \times 10^{-27} \text{ kg}$
 $RH = 2.18 \times 10^{-18} \text{ J}$
Specific heat of water = 4.184 J/g·K
STP = 273.15 K and 1 atm
Avogadro's number: 6.022×10^{23}

Equations

d (density) = m/V
 $P_1 V_1 = P_2 V_2$
 $V_1/T_1 = V_2/T_2$
 $P_1 V_1/n_1 T_1 = P_2 V_2/n_2 T_2$
 $PV = nRT$
 $(P + a(n^2/V^2)) \cdot (V - nb) = nRT$
molar mass (M) = mRT/PV
density (d) = MP/RT
 $x_A = n_A/n_{\text{tot}} = P_A/P_{\text{tot}} = V_A/V_{\text{tot}}$
 $P_{\text{tot}} = P_A + P_B + \dots$
 $n_{\text{tot}} = n_A + n_B + \dots$

$$\mu_{rms} = \sqrt{\frac{3RT}{M}}$$

$$\frac{\text{Rate of effusion A}}{\text{Rate of effusion B}} = \sqrt{\frac{MW_B}{MW_A}}$$

$$Q = C \times \Delta T = c_{\text{specific}} \times m \times \Delta T$$

$$Q = n \times \Delta H \text{ (kJ/mol)} = m \times \Delta H \text{ (kJ/g)}$$

$$w = -P\Delta V$$

$$\Delta E = q + w$$

$$\Delta H^\circ = \sum n\Delta H_f^\circ(\text{products}) - \sum n\Delta H_f^\circ(\text{reactants})$$

$$\Delta H^\circ = \sum n\Delta H^\circ(\text{bonds broken}) - \sum n\Delta H^\circ(\text{bonds formed})$$

$$E = h\nu$$

$$c = \lambda\nu$$

$$\lambda = h/mv$$

$$\Delta E = -2.18 \times 10^{-18} J \left(\frac{1}{n_f^2} - \frac{1}{n_i^2} \right)$$

$$\ln \left(\frac{P_2}{P_1} \right) = \frac{\Delta H_{vap}}{R} \left(\frac{1}{T_1} - \frac{1}{T_2} \right)$$

$$C_g = kP_g$$

$$P_{\text{solution}} = P_{\text{solvent}} X_{\text{solvent}}$$

$$P_{\text{solution}} = \sum P_j = \sum P_j X_j$$

$$\Delta T_b = K_b m_i$$

$$\Delta T_f = K_f m_i$$

$$\pi = MRTi$$

Thermodynamic and Electrochemistry

$$S = k_b \times \ln(W)$$

$$k_b = 1.381 \times 10^{-23} \text{ J/K}$$

$$\Delta S = q_{\text{rev}}/T$$

$$\Delta S_{\text{surr}} = q_{\text{surr}}/T = -q_{\text{rev}}/T$$

$$\Delta S_{\text{univ}} = \Delta S_{\text{sys}} + \Delta S_{\text{surr}}$$

$$\Delta S^\circ_{\text{rxn}} = \sum \nu S^\circ_{\text{products}} - \sum \nu S^\circ_{\text{reactants}}$$

$$\Delta H^\circ_{\text{rxn}} = \sum \nu H^\circ_{\text{products}} - \sum \nu H^\circ_{\text{reactants}}$$

$$\Delta G^\circ_{\text{rxn}} = \sum \nu G^\circ_{\text{products}} - \sum \nu G^\circ_{\text{reactants}}$$

$$\Delta G = \Delta H - T\Delta S$$

$$\Delta G = \Delta G^\circ + RT \cdot \ln Q$$

$$R = 8.314 \text{ J/mol.K}$$

$$\Delta G^\circ = -RT \cdot \ln K$$

$$\Delta G = -nFE_{\text{cell}}$$

$$F = 96485 \text{ J/(V}\cdot\text{mol e}^-)$$

$$E^\circ_{\text{cell}} = RT/nF \ln K$$

$$E^\circ_{\text{cell}} = (0.0257/n) \ln K = (0.0592/n) \log K$$

$$E_{\text{cell}} = E^\circ_{\text{cell}} - (RT/nF) \ln Q$$

$$E_{\text{cell}} = E^\circ_{\text{cell}} - (0.0257/n) \ln Q$$

$$\text{Electrolysis: } Q \text{ (total charge)} = I \times t = n \times F$$

Integrated Rate Laws & half-life

$$\ln \frac{[A]}{[A]_0} = -kt$$

$$\frac{1}{[A]} = kt + \frac{1}{[A]_0}$$

$$[A] = -kt + [A]_0$$

$$t_{1/2} = \frac{[A]_0}{2k}$$

$$t_{1/2} = \frac{\ln 2}{k} = \frac{0.693}{k}$$

$$t_{1/2} = \frac{1}{k[A]_0}$$

$$\ln \frac{k_2}{k_1} = -\frac{E_a}{R} \left(\frac{1}{T_2} - \frac{1}{T_1} \right)$$

Equilibrium and Acid / Base

$$K_p = K_c \times (RT)^{\Delta n}$$

$$\text{pH} = -\log[\text{H}_3\text{O}^+]$$

$$K_w = 1.0 \times 10^{-14} \text{ at } 25^\circ\text{C}$$

$$K_w = [\text{H}_3\text{O}^+] \times [\text{OH}^-]$$

$$K_w = K_a \times K_b$$

$$\text{p}K_a = -\log[K_a]$$

$$\text{Buffer: pH} = \text{p}K_a + \log \frac{[\text{A}^-]}{[\text{HA}]}$$

$$\ln \frac{K_2}{K_1} = \frac{\Delta H_{rxn}^\circ}{R} \left(\frac{1}{T_1} - \frac{1}{T_2} \right)$$

1

| |
|-----------------------|
| 1 H 1.01 |
|-----------------------|

| | |
|------------------------|------------------------|
| 3 Li 6.94 | 4 Be 9.01 |
|------------------------|------------------------|

| | |
|--------------------------|--------------------------|
| 11 Na 22.99 | 12 Mg 24.31 |
|--------------------------|--------------------------|

| | | |
|-------------------------|--------------------------|--------------------------|
| 19 K 39.10 | 20 Ca 40.08 | 21 Sc 44.96 |
|-------------------------|--------------------------|--------------------------|

| | | |
|--------------------------|--------------------------|-------------------------|
| 37 Rb 85.47 | 38 Sr 87.62 | 39 Y 88.91 |
|--------------------------|--------------------------|-------------------------|

| | |
|---------------------------|---------------------------|
| 37 Cs 132.91 | 56 Ba 137.33 |
|---------------------------|---------------------------|

| | |
|--------------------------|--------------------------|
| 87 Fr [223] | 88 Ra [226] |
|--------------------------|--------------------------|

18

| |
|------------------------|
| 2 He 4.00 |
|------------------------|

| | | | | | |
|------------------------|------------------------|------------------------|------------------------|------------------------|--------------------------|
| 5 B 10.81 | 6 C 12.01 | 7 N 14.01 | 8 O 16.00 | 9 F 19.00 | 10 Ne 20.18 |
|------------------------|------------------------|------------------------|------------------------|------------------------|--------------------------|

| | | | | | |
|--------------------------|--------------------------|-------------------------|-------------------------|--------------------------|--------------------------|
| 13 Al 26.98 | 14 Si 28.09 | 15 P 30.97 | 16 S 32.06 | 17 Cl 35.45 | 18 Ar 39.95 |
|--------------------------|--------------------------|-------------------------|-------------------------|--------------------------|--------------------------|

| | | | | | |
|--------------------------|--------------------------|--------------------------|--------------------------|--------------------------|--------------------------|
| 31 Ga 69.72 | 32 Ge 72.63 | 33 As 74.92 | 34 Se 78.97 | 35 Br 79.90 | 36 Kr 83.80 |
|--------------------------|--------------------------|--------------------------|--------------------------|--------------------------|--------------------------|

| | | | | | |
|---------------------------|---------------------------|---------------------------|---------------------------|--------------------------|---------------------------|
| 49 In 114.82 | 50 Sn 118.71 | 51 Sb 121.76 | 52 Te 127.60 | 53 I 126.90 | 54 Xe 131.29 |
|---------------------------|---------------------------|---------------------------|---------------------------|--------------------------|---------------------------|

| | | | | | |
|---------------------------|--------------------------|---------------------------|--------------------------|--------------------------|--------------------------|
| 81 Tl 204.38 | 82 Pb 207.2 | 83 Bi 208.98 | 84 Po [209] | 85 At [210] | 86 Rn [222] |
|---------------------------|--------------------------|---------------------------|--------------------------|--------------------------|--------------------------|

| | | | | | |
|---------------------------|---------------------------|---------------------------|---------------------------|---------------------------|---------------------------|
| 113 Nh [286] | 114 Fl [290] | 115 Mc [290] | 116 Lv [293] | 117 Ts [294] | 118 Og [294] |
|---------------------------|---------------------------|---------------------------|---------------------------|---------------------------|---------------------------|

Periodic Table of the Elements

| | | | | | | | | | | | | | | |
|---------------------------|---------------------------|---------------------------|---------------------------|--------------------------|---------------------------|---------------------------|---------------------------|---------------------------|---------------------------|---------------------------|---------------------------|---------------------------|---------------------------|---------------------------|
| 57 La 138.91 | 58 Ce 140.12 | 59 Pr 140.91 | 60 Nd 144.24 | 61 Pm [145] | 62 Sm 150.36 | 63 Eu 151.96 | 64 Gd 157.25 | 65 Tb 158.93 | 66 Dy 162.50 | 67 Ho 164.93 | 68 Er 167.26 | 69 Tm 168.93 | 70 Yb 173.05 | 71 Lu 174.97 |
| 89 Ac [227] | 90 Th 232.04 | 91 Pa 231.04 | 92 U 238.03 | 93 Np [237] | 94 Pu [244] | 95 Am [243] | 96 Cm [247] | 97 Bk [247] | 98 Cf [251] | 99 Es [252] | 100 Fm [257] | 101 Md [258] | 102 No [259] | 103 Lr [262] |